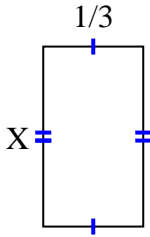


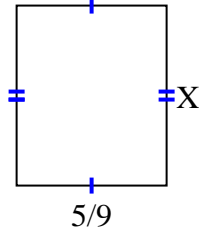


Find the value of X for each figure. Each figure is in centimeters (cm). Not to scale.

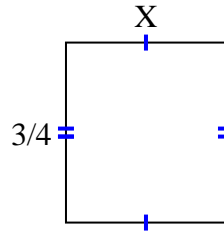
1) area = $\frac{3}{15} \text{ cm}^2$



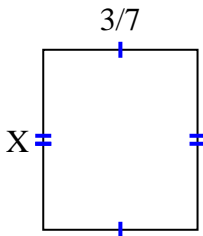
2) area = $\frac{10}{27} \text{ cm}^2$



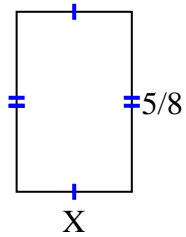
3) area = $\frac{6}{12} \text{ cm}^2$



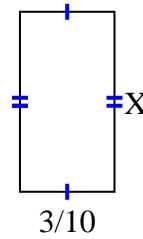
4) area = $\frac{9}{42} \text{ cm}^2$



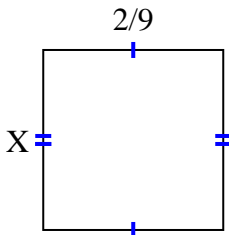
5) area = $\frac{10}{40} \text{ cm}^2$



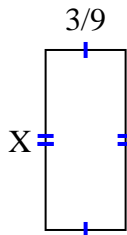
6) area = $\frac{12}{70} \text{ cm}^2$



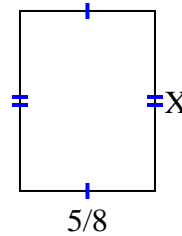
7) area = $\frac{4}{81} \text{ cm}^2$



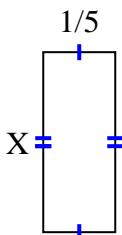
8) area = $\frac{9}{36} \text{ cm}^2$



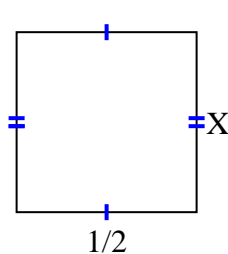
9) area = $\frac{25}{48} \text{ cm}^2$



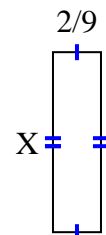
10) area = $\frac{2}{20} \text{ cm}^2$



11) area = $\frac{3}{12} \text{ cm}^2$



12) area = $\frac{10}{54} \text{ cm}^2$



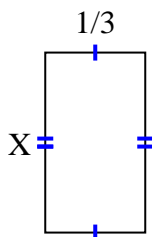
Answers

1. _____
2. _____
3. _____
4. _____
5. _____
6. _____
7. _____
8. _____
9. _____
10. _____
11. _____
12. _____

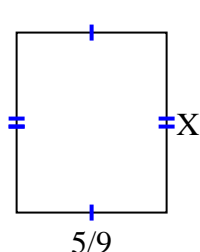


Find the value of X for each figure. Each figure is in centimeters (cm). Not to scale.

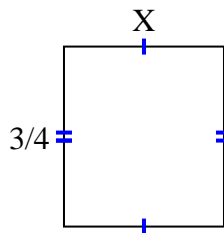
1) area = $\frac{3}{15} \text{ cm}^2$



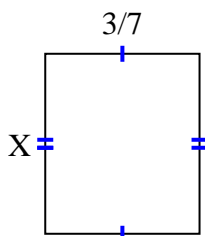
2) area = $\frac{10}{27} \text{ cm}^2$



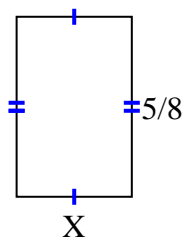
3) area = $\frac{6}{12} \text{ cm}^2$



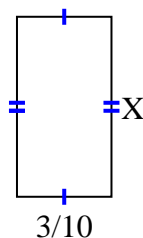
4) area = $\frac{9}{42} \text{ cm}^2$



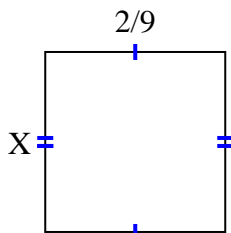
5) area = $\frac{10}{40} \text{ cm}^2$



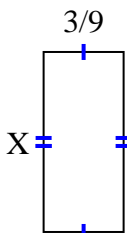
6) area = $\frac{12}{70} \text{ cm}^2$



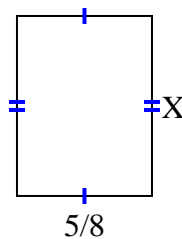
7) area = $\frac{4}{81} \text{ cm}^2$



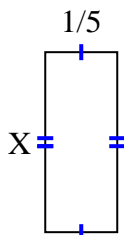
8) area = $\frac{9}{36} \text{ cm}^2$



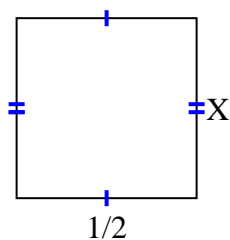
9) area = $\frac{25}{48} \text{ cm}^2$



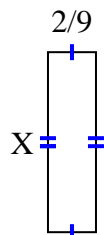
10) area = $\frac{2}{20} \text{ cm}^2$



11) area = $\frac{3}{12} \text{ cm}^2$



12) area = $\frac{10}{54} \text{ cm}^2$



Answers

1. $\frac{3}{5}$

2. $\frac{2}{3}$

3. $\frac{2}{3}$

4. $\frac{3}{6}$

5. $\frac{2}{5}$

6. $\frac{4}{7}$

7. $\frac{2}{9}$

8. $\frac{3}{4}$

9. $\frac{5}{6}$

10. $\frac{2}{4}$

11. $\frac{3}{6}$

12. $\frac{5}{6}$